




Red Patterns

Instructions

Task:

Follow instructions on the next page to complete the pattern cards below:



Follow the instructions below

1. Split a page into 4 columns entitled: colour, shape and number.
2. Look at the picture and work out what you need to make it up.
3. In each column, fill in what you need eg.

Colour	Shape	Number
Red	Semi curve	4
White	Full	4
Red	Star	1

4. Count the blocks, make sure you have 25.
5. Turn all blocks over to red, red and white, and white.
6. Sort the different shapes into rows.
7. Then look at the picture and talk about how you are going to put it together eg. The first blocks I will put in are the 6 red full blocks in rows of two in the bottom right hand corner.
The second blocks are the two red $\frac{1}{4}$ curves in the top right hand corner.
8. Make sure you have discussed the position and rotation of the blocks.
9. Take away the picture and complete as much of the puzzle as you can without referring back to it.